

Name: \_\_\_\_\_

Teacher: \_\_\_\_\_


Grade & Section: \_\_\_\_\_

Date: \_\_\_\_\_


# 4

# Multiplication


Find the product of the numbers below. Write your answer in the space below each problem.




$4 \times 1 = \underline{\quad}$




$4 \times 2 = \underline{\quad}$



$4 \times 3 = \underline{\quad}$



$4 \times 4 = \underline{\quad}$



$4 \times 5 = \underline{\quad}$



$4 \times 6 = \underline{\quad}$

